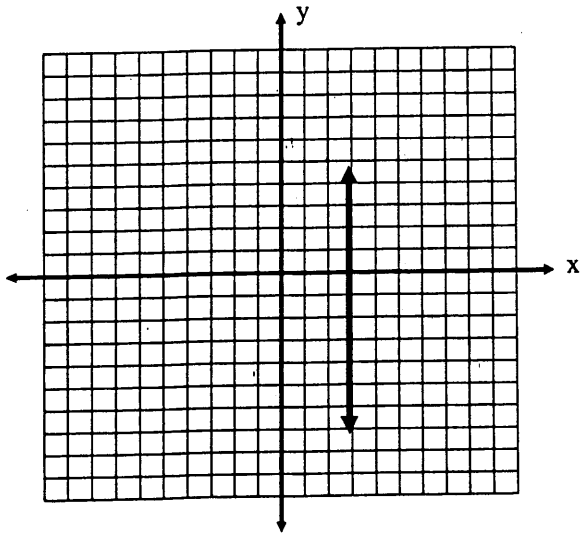


8. Find the slope of the line pictured below:



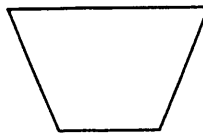
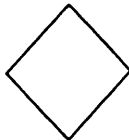

---

9. What is the value of  $x$  in this equation:

$$3(x-2) - 4(2+3x) = x+10$$

---

10. Circle the shape(s) that is not a parallelogram:



11. Simplify this expression:

$$\frac{6y^2}{14xy} \times \frac{7xy}{4x^2}$$

---